

Balika. Vidyapith Lakhisarai (811311)

Class - III

Subject - Maths

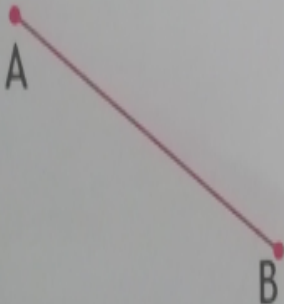



Ch.- Geometry

Date - 02/11/2021

***BASED ON N.C.E.R.T ***

Page no - 203

Measure the following line segment and note down their lengths :

a		b	
c		c	
1	$\overline{AB} = \dots\dots\dots \text{cm}$	2	$\overline{CD} = \dots\dots\dots \text{cm}$
3	$\overline{PQ} = \dots\dots\dots \text{cm}$	4	$\overline{MN} = \dots\dots\dots \text{cm}$

(Bikash kumar)